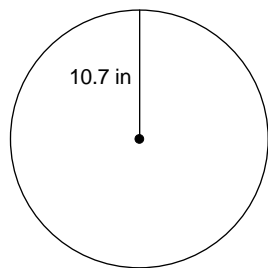


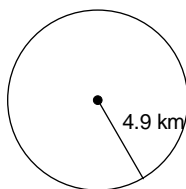
Assignment 3: Area

Find the area of each. Round to the nearest tenth.

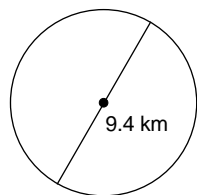
1)



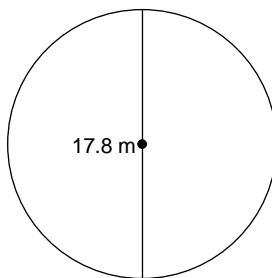
2)



3)

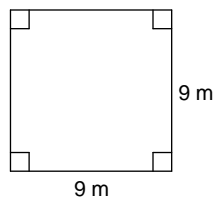


4)

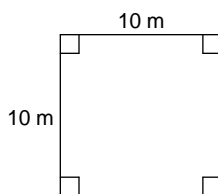


Find the area of each.

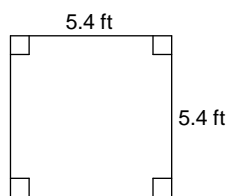
5)



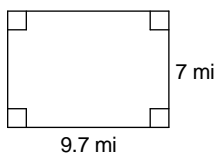
6)



7)



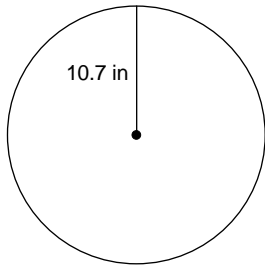
8)



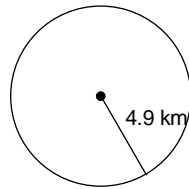
Assignment 3: Area

Find the area of each. Round to the nearest tenth.

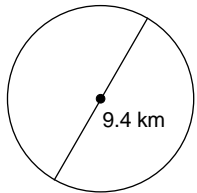
1)

 359.7 in^2

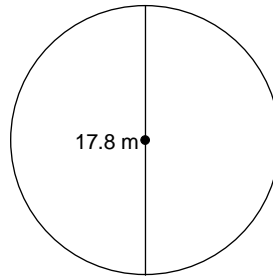
2)

 75.4 km^2

3)

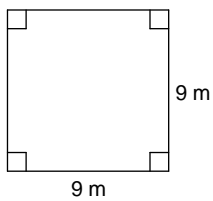
 69.4 km^2

4)

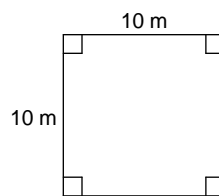
 248.8 m^2

Find the area of each.

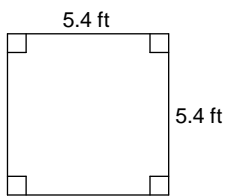
5)

 81 m^2

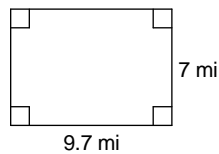
6)

 100 m^2

7)

 29.16 ft^2

8)

 67.9 mi^2