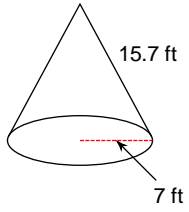


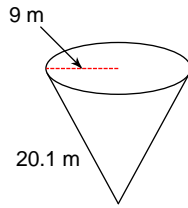
Assignment 5: Surface Area and Volume

Find the surface area of each figure. Round to the nearest tenth.

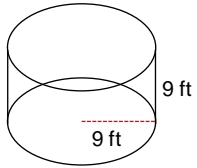
1)



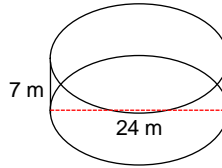
2)



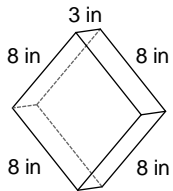
3)



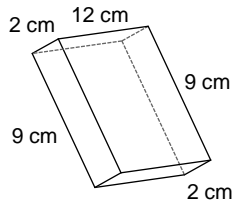
4)



5)

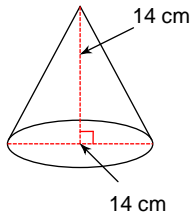


6)

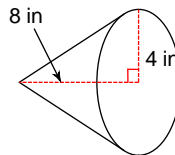


Find the volume of each figure. Round to the nearest tenth.

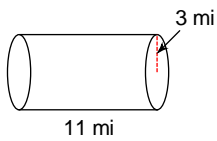
7)



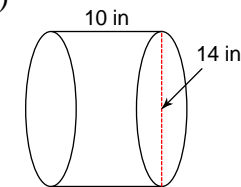
8)



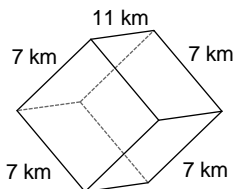
9)



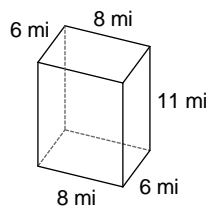
10)



11)



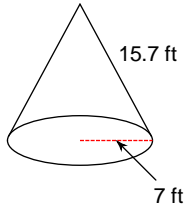
12)



Assignment 5: Surface Area and Volume

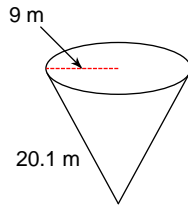
Find the surface area of each figure. Round to the nearest tenth.

1)



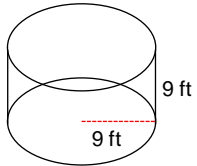
499.2 ft²

2)



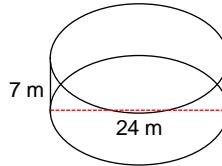
822.8 m²

3)



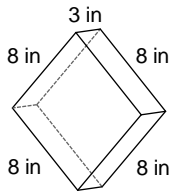
1017.9 ft²

4)



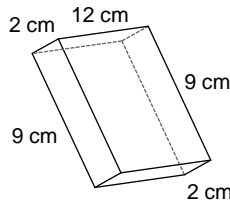
1432.6 m²

5)



224 in²

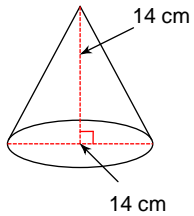
6)



300 cm²

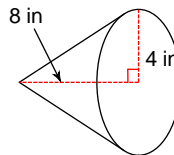
Find the volume of each figure. Round to the nearest tenth.

7)



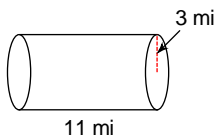
718.4 cm³

8)



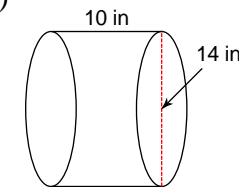
134 in³

9)



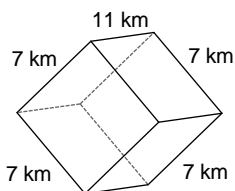
311 mi³

10)



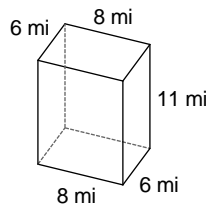
1539.4 in³

11)



539 km³

12)



528 mi³